



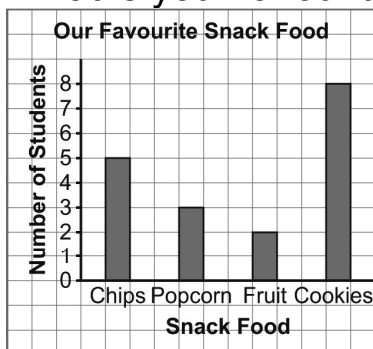
Name \_\_\_\_\_ Date \_\_\_\_\_

Master 7.20

## Extra Practice 2

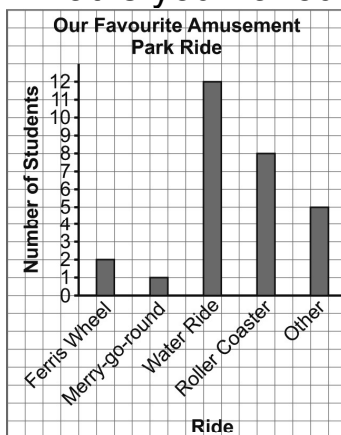
## Lesson 3: Reading Bar Graphs

1. Children from a Grade 3 class were asked:  
What is your favourite snack food?



- Which snack food is most popular? Least popular?
- List the snack foods from most popular to least popular.
- How many children were asked?
- Make up your own question about the graph.  
Answer the question.

2. Children in a class were asked:  
What is your favourite amusement park ride?



- Which ride is most popular?
- How many children chose the roller coaster?
- How many more children chose the roller coaster than the merry-go-round? Explain how you know.
- Write 2 other things you know from the graph.

Name \_\_\_\_\_ Date \_\_\_\_\_

Master 7.21

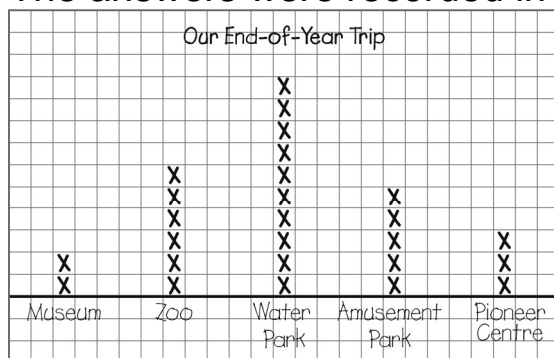
## Extra Practice 3

## Lesson 4: Drawing Bar Graphs

1. The students in a Grade 3 class were asked:  
Where would you like to go for summer vacation?

Choices for Summer Vacation		
Place	Tally	Number of students
Cottage		7
Camping		4
Florida		10
Another province		3
Other		2

- a) Draw a bar graph.  
b) What did you find out?
2. Students in a class were asked:  
Where would you like to go on the end-of-year school trip?  
The answers were recorded in a line plot.



- a) Draw a bar graph to show the data.  
b) How are the graphs the same? How are they different?

Name \_\_\_\_\_ Date \_\_\_\_\_

Master 7.22

**Extra Practice 4****Lesson 5: Using Graphs to Solve Problems**

1. Work as a class to solve this problem.  
What activity should grade 3 students do to raise money for charity?
  - a) List 5 possible activities on the board.
  - b) Have each student add a tally mark beside the activity he or she chooses.
  - c) Copy the data in a tally chart.
  - d) Draw a bar graph.
  - e) Solve the problem.

Name \_\_\_\_\_ Date \_\_\_\_\_

## Master 7.23a

## Extra Practice Sample Answers

## Extra Practice 1 – Master 7.19

## Lesson 1

1. a)

My Family		
Number of Brothers and Sisters	Tally	Number
0	///	3
1		11
2		9
3	//	2

- b) 2 students  
 c) Most students have 1 brother or sister. I know because the row for 1 has the greatest number of tally marks.  
 d) I know that 3 students have no brothers or sisters. I know that 11 students have 1 brother or sister, 9 students have 2 brothers and sisters, and 2 students have 3 brothers and sisters. By adding the tally marks, I know there are 25 students in my class.

## Lesson 2

1. a) Squirrels; cats  
 Squirrels has the most Xs above it. Cats has the fewest Xs above it.  
 b) Kelly saw 3 more squirrels than birds.  
 c) I know Kelly saw more dogs than cats. By adding the number of Xs, I know that Kelly saw 15 animals on her walk.

2. a)

Our End-of-Year Trip				
		X		
		X		
		X		
		X		
		X		
	X	X		
	X	X		
	X	X		
	X	X		
	X	X		
	X	X		
	X	X		
	X	X		
X			X	
X			X	
Museum	Zoo	Water Park	Amusement Park	Pioneer Centre

- b) Most children would like to go the water park.

- c) Which was the least popular choice? (Answer: museum)  
 How many more children wanted to go to the zoo than the pioneer centre? (Answer: 3 children)

## Extra Practice 2 – Master 7.20

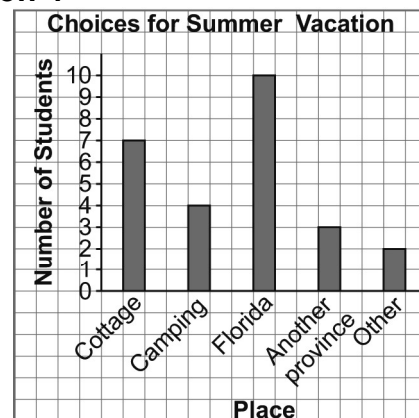
## Lesson 3

1. a) Cookies; fruit  
 b) Cookies, chips, popcorn, fruit  
 c) 28 children  
 d) How many more children like chips than popcorn? (Answer: 2 children;  $5 - 3 = 2$ )
2. a) Water ride  
 b) 8 children  
 c) 7 children;  $8 - 1 = 7$   
 d) I know that the least favourite ride is the merry-go-round. I also know that 4 more children chose the water ride than the roller coaster.

## Extra Practice 3 – Master 7.21

## Lesson 4

1. a)



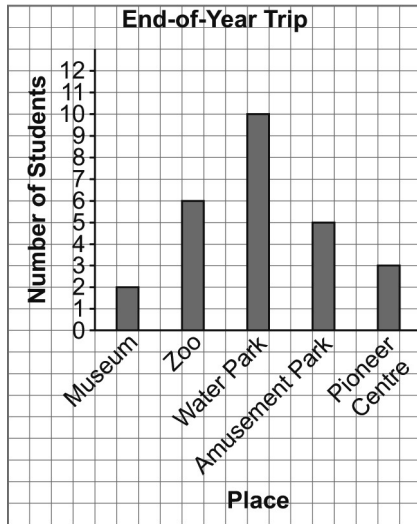
- b) I found out that most grade 3 students would like to go to Florida. Ten students would like to go to Florida, 7 students would like to go to the cottage, 4 students would like to go camping, 3 students would like to go to another province in Canada, and 2 students would like to go somewhere else.

Name \_\_\_\_\_ Date \_\_\_\_\_

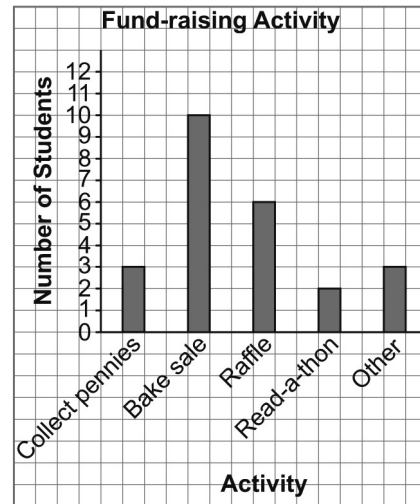
Master 7.23b

## Extra Practice Sample Answers, continued

2. a)



d)



- e) The students should hold a used book sale since it was the most popular choice of activity.

## Extra Practice 4 – Master 7.22

## Lesson 5

1. a) Collect loonies, used book sale, raffle, read-a-thon, other  
b) and c)

Fund-Raising Activities		
Activity	Tally	Number of students
Collect loonies	///	3
Used book sale		10
Raffle		6
Read-a-thon	//	2
Other	///	3